

Name: \_\_\_\_\_ Date: \_\_\_\_\_  
IPC

Warm up 73

**Describe** the following:

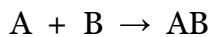
chemical reaction –

physical change -

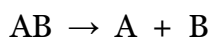
chemical change -

**Describe** the following reactions:

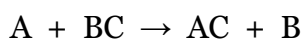
\_\_\_\_\_



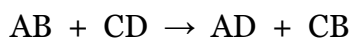
\_\_\_\_\_



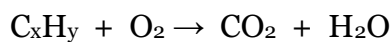
\_\_\_\_\_



\_\_\_\_\_



\_\_\_\_\_

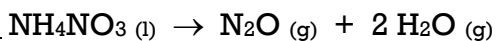


Name: \_\_\_\_\_ Date: \_\_\_\_\_  
IPC

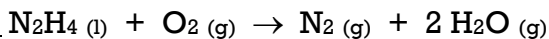
Warm up 74

**Classify** the following reactions:

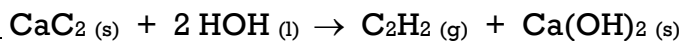
\_\_\_\_\_



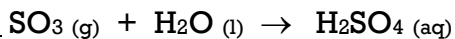
\_\_\_\_\_



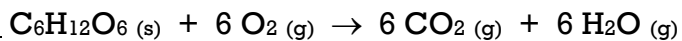
\_\_\_\_\_



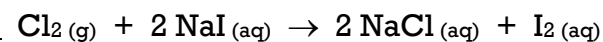
\_\_\_\_\_



\_\_\_\_\_



\_\_\_\_\_



\_\_\_\_\_

